

Name \_\_\_\_\_ Date \_\_\_\_\_ Hour \_\_\_\_\_

## 6:1:1 Surface Area and Volume WKSH #1

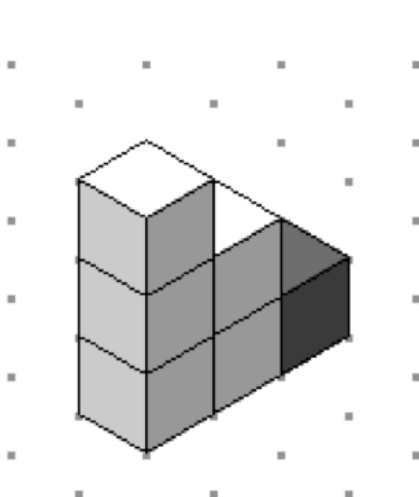
Redraw each figure without the shaded cube. Find the volume and surface area for both the before and after views.

1. Volume:

Volume:

Surface Area:

Surface Area:

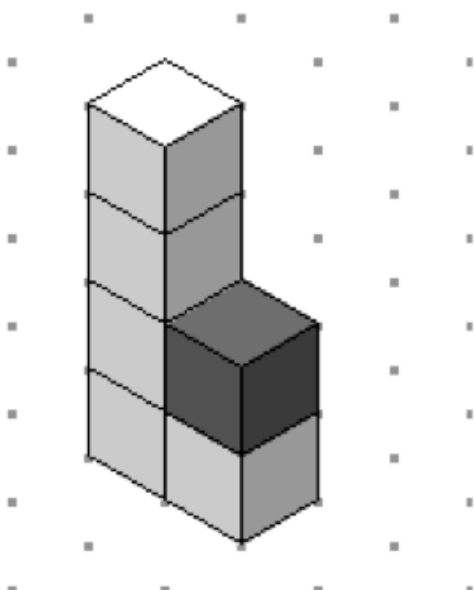


2. Volume:

Volume:

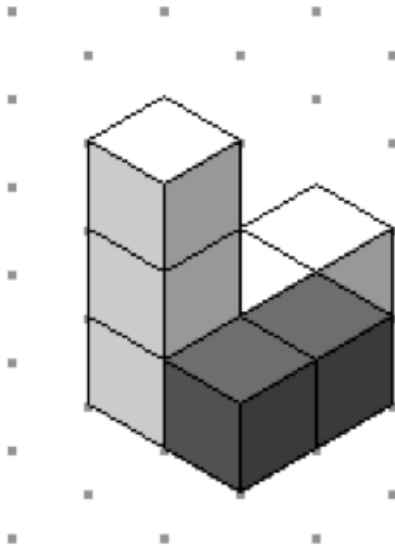
Surface Area:

Surface Area:



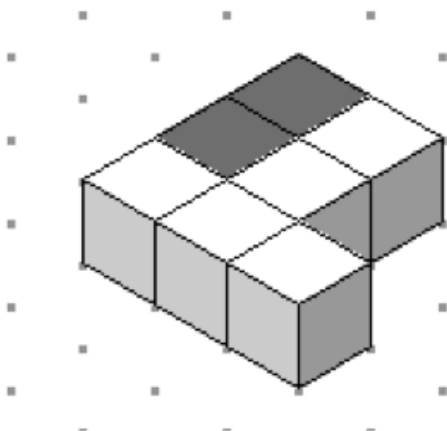
3. Volume:

Surface Area:



4. Volume:

Surface Area:



Volume:

Surface Area:

